

**Smiley Face Math**  
**Grade 1 Worksheet I**

Name: \_\_\_\_\_

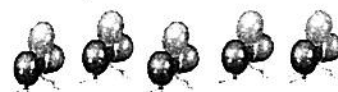
- ☺☺ 1. Tori found 4 pink shells and 5 gray shells. How many shells did she find? Show the problem with counters.



4 pink shells

Answer: Tori found \_\_\_\_\_ shells in all.

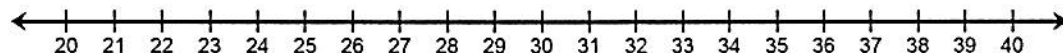
- ☺☺ 2. James had 15 balloons. He let go of 9 and they floated away. How many balloons did James have left? Draw a picture to show the problem.



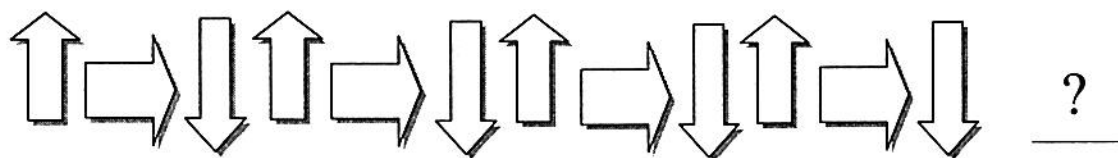
15 balloons

Answer: James then had \_\_\_\_\_ balloons.

- ☺☺ 3. Name a number that comes *between* 23 and 38. Answer: \_\_\_\_\_



- ☺☺☺ 4. Draw the shape that comes next in this pattern. Explain your answer.



Explanation: \_\_\_\_\_


\_\_\_\_\_

- 😊😊 5. Which number is bigger, 86 or 68? Explain how you know.

Answer: \_\_\_\_\_ is bigger because \_\_\_\_\_

\_\_\_\_\_

- 😊😊 6. Andy spun his top for 12 seconds on the first try, 9 seconds on the second try, and 13 seconds on the third try. Put Andy's times in order from shortest to longest.



Shortest time: \_\_\_\_\_

Longest time: \_\_\_\_\_

- 😊😊 7. Katie and John found *between* 80 and 85 empty water bottles at the park clean up. Exactly how many bottles might they have found?



Answer: They might have found \_\_\_\_\_, \_\_\_\_\_, \_\_\_\_\_,  
or \_\_\_\_\_ bottles

- 😊😊😊 8. Spot ate 6 dog bones. Ruby ate 7 more than Spot. How many dog bones did Ruby eat? Draw a picture to help you find the answer.



Spot's bones

Answer: Ruby ate \_\_\_\_\_ bones.